

Entrance Assessment 2023

U.K.G

Name.....

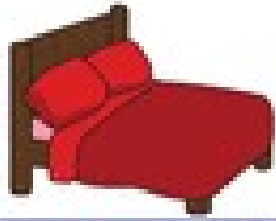
English

Time – 30 Minutes


M.M. – 20 Marks (O-10,W-10)

Q.1 Write the missing vowels for each word below?

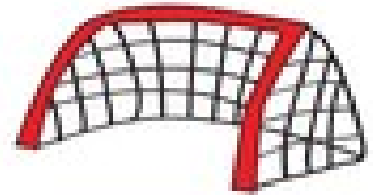
6



b _ d



c _ t




n _ t



n _ t



d _ g



b _ t

Q.2 Fill in the missing letters (lowercase).

2

a ___ c ___ e

g ___ l ___ k

Q.3 Match the Rhyming words ?

2

Cat

Pet

Fan

Hot

Net

Pan

Pot

Rat


Hindi

Time – 30 Minutes

M.M. – 20 Marks (O-10,W-10)

प्र.१ चित्र देखकर पहला अक्षर लिखिए।

(अंक ३)



प्र.२ अक्षर जोड़कर शब्द लिखिए।

(अंक ३)

ड + र = _____

म + त = _____

फ + ल = _____

स + ब = _____

ध + न = _____

क + ब = _____

प्र.३ तुकान्त शब्द का मिलान करिये।

(अंक ४)

धन

बान

आन

वन

नगर

हवन

पवन

मगर

Mathematics

Time – 30 Minutes

M.M. – 20 Marks (O-10,W-10)

Q.1 Add the numbers and write the sum?

Marks 2


संख्याएँ जोड़ें और योग लिखें?

$$\begin{array}{r} 4 \\ + 2 \\ \hline \end{array}$$
$$\begin{array}{r} 5 \\ + 2 \\ \hline \end{array}$$

Q.2 Fill in the missing numbers.

Marks 5

लुप्त संख्याओं को भरें-



Q.3 Subtract the number and write the answer?

Marks 2

(संख्या घटाएँ और उत्तर लिखें?)

$$\begin{array}{r} 5 \\ - 2 \\ \hline \end{array}$$
$$\begin{array}{r} 6 \\ - 3 \\ \hline \end{array}$$

Q.3 Count and circle the correct number.

Marks 1

(गिने और सही संख्या पर गोला बनाएं।)

A box containing 10 colorful triangular blocks (purple, yellow, green, blue) and a table with numbers 8, 5, and 10.

8	5	10
----------	----------	-----------